


































 Read	<p>Harper had 69 stickers. Abby had 35 stickers. How many stickers did they have altogether?</p>	 Understand	
 Choose		 Solve	
 Answer		 Check	







 Read	<p>Tim ran 135 metres. Rhea ran 27 metres further than Tim. How far did Rhea run altogether?</p>	 Understand	
 Choose		 Solve	
 Answer		 Check	







 Read	<p>Alfie's skipping rope was 125 cm long. Amal's skipping rope was 18 cm shorter than Alfie's. How long was Amal's skipping rope?</p>	 Understand	
 Choose		 Solve	
 Answer		 Check	







 Read	<p>Bevin is 138 cm tall. Her sister is 41 cm shorter than her. How tall is Bevin's sister?</p>	 Understand	
 Choose		 Solve	
 Answer		 Check	







 <p>Read</p>	<p>Quinn bought a DVD for £12, a jumper for £27 and a hat for £25. How much did Quinn spend altogether?</p>	 <p>Understand</p>	
 <p>Choose</p>		 <p>Solve</p>	
 <p>Answer</p>		 <p>Check</p>	







 <p>Read</p>	<p>Rosie was reading a book that had 274 pages. She has read 53 pages of the book. How many pages of the book are left to read?</p>	 <p>Understand</p>	
 <p>Choose</p>		 <p>Solve</p>	
 <p>Answer</p>		 <p>Check</p>	







 Read	<p>Rowena has two dogs called Rocky and Buddy. Together, the two dogs weigh 165 kg. If Rocky weighs 82 kg, how much does Buddy weigh?</p>	 Understand	
 Choose		 Solve	
 Answer		 Check	







 Read	<p>Daniel bought a coat that cost £165, a hat that cost £56 and a scarf that cost £12. How much did Daniel spend altogether?</p>	 Understand	
 Choose		 Solve	
 Answer		 Check	







 Read	<p>Layla is 167 cm tall. Her brother Owen is 78 cm shorter than Layla. How tall is Owen?</p>	 Understand	
 Choose		 Solve	
 Answer		 Check	







 Read	<p>Readwell Primary has two Year 3 classes. Class 3A has 186 books and Class 3B has 119 books. How many books does Year 3 have altogether?</p>	 Understand	
 Choose		 Solve	
 Answer		 Check	







 <p>Maisie has 259 songs on her iPod. Isaac has 134 songs more than Maisie. How many songs does Isaac have on his iPod?</p>	
	
	







 <p>There are 437 children at St Mary's Primary School. If 229 of them are girls, how many boys are there?</p>	
	
	







 Read	<p>Holly and Ivy are making paper chains for Christmas. Holly's paper chain is 549 cm long. Ivy's paper chain is 182 cm longer. How long is Ivy's paper chain?</p>	 Understand	
 Choose		 Solve	
 Answer		 Check	

 Read	<p>Leo was reading a book that had 815 pages. He read 221 pages on Monday and 176 pages on Tuesday. How many pages of the book are left?</p>	 Understand	
 Choose		 Solve	
 Answer		 Check	

 Read	<p>There are 672 people sitting in a cinema. If there are 149 men and 231 women, how many of the people in the cinema are children?</p>	 Understand	
 Choose		 Solve	
 Answer		 Check	

 Read	<p>Alexa grows red and white roses. Out of the 724 flowers she has to sell, 287 of them are white roses. How many red roses does she have to sell?</p>	 Understand	
 Choose		 Solve	
 Answer		 Check	

 Read	<p>Morgan has 659 followers on Facebook and 276 followers on Twitter. How many followers does he have altogether?</p>	 Understand	
 Choose		 Solve	
 Answer		 Check	

 Read	<p>An aquarium has 534 fish in one tank, 98 fish in another and 219 fish in a third tank. How many fish are at the aquarium altogether?</p>	 Understand	
 Choose		 Solve	
 Answer		 Check	

Name: _____ Date: _____

BLUE

**You are on the
BLUE team!**



- Pick any question to start on.
- Solve the problem and find the answer below.
- Go to your next question and solve that one.
- Draw a straight line between the two answers.
- Keep going until you have ended back at your first answer.

A dot-to-dot puzzle consisting of 30 numbered black dots scattered across the page. The numbers are: 71, 112, 218, 208, 81, 114, 145, 173, 194, 56, 65, 261, 155, 185, 222, 58, 223, 249, 251, 21, 99, 63, 46, 73, 35, 142, 18, 115, 97, 148, 179, 132, 119, 216, 118, 161.



What animal have you revealed in your dot-to-dot?

Name: _____ Date: _____

ORANGE

You are on the ORANGE team!



- Pick any question to start on.
- Solve the problem and find the answer below.
- Go to your next question and solve that one.
- Draw a straight line between the two answers.
- Keep going until you have ended back at your first answer.

A dot-to-dot puzzle consisting of 40 numbered black dots scattered across the page. The numbers are: 49, 203, 161, 84, 87, 220, 584, 245, 124, 514, 36, 347, 259, 548, 104, 745, 360, 365, 603, 199, 420, 591, 422, 61, 52, 215, 286, 532, 71, 64, 66, 56, 137, 194, 268, 243, 162, 175, 205, 195, 344, 185.



What animal have you revealed in your dot-to-dot?

Name: _____ Date: _____

GREEN

You are on the GREEN team!




- Pick any question to start on.
- Solve the problem and find the answer below.
- Go to your next question and solve that one.
- Draw a straight line between the two answers.
- Keep going until you have ended back at your first answer.

A dot-to-dot puzzle consisting of 40 numbered black dots scattered across the page. The numbers are: 542, 119, 219, 451, 362, 698, 475, 362, 115, 478, 392, 108, 289, 831, 390, 825, 410, 381, 755, 510, 993, 281, 731, 287, 663, 962, 846, 694, 207, 832, 115, 855, 412, 209, 654, 587, 510, 480, 361, 377, 519, 197, 965, 479.



What animal have you revealed in your dot-to-dot?



BLUE

There are 85 dogs at training school. 29 more dogs join the class. How many dogs are there now?


ORANGE

Buster's owner bought a 250 kg bag of dog food. A week later there was only 89 kg left. How much food had Buster eaten?

GREEN

The 456 children at Barkwell Primary were asked if they had a dog. 237 said they did have a dog. How many children said they didn't have a dog?

Now go to the **monkey** question!





BLUE

There were 154 monkeys in a tree. 89 of them were adult monkeys. How many were baby monkeys?


ORANGE

There were 117 monkeys in one tree and 128 in the next tree. How many monkeys were in both trees?

GREEN

A nature park had 143 spider monkeys, 218 capuchin monkeys and 117 howler monkeys. How many monkeys were in the nature park altogether?

Now go to the **giraffe** question!





BLUE

$$72 + 113 =$$

ORANGE

$$269 - 185 =$$

GREEN

$$369 + 74 + 8 =$$

Now go to the **fish** question!





BLUE

There were 95 goldfish and 128 tropical fish at a pet shop. How many fish were there altogether?

ORANGE

There are 365 fish at a pet shop. 241 of them are tropical fish and the rest are goldfish. How many goldfish are there?

GREEN

The fish at an aquarium are given 436 g of food on Saturday and 389 g on Sunday. How much food were they given over the weekend?

Now go to the **gorilla** question!





BLUE

A male gorilla weighs 181 kg. His female mate weighs 108 kg. How much heavier is the male gorilla than the female gorilla?

ORANGE


Melvin the gorilla ate 313 leaves in the morning and then 235 in the afternoon. How many leaves did he eat altogether that day?

GREEN

Boris the gorilla found 457 ticks on his friend Daphne. Daphne found 298 ticks on Boris. How many ticks did they find altogether?

Now go to the **tortoise** question!





BLUE

$$187 - 39 =$$


ORANGE

$$345 + 246 =$$

GREEN

$$916 - 213 - 293 =$$

Now go to the **lion** question!





BLUE

There are 6 male lions, 11 female lions and 18 baby lions in a pride. How many lions are in the pride altogether?


ORANGE

There are 12 male lions, 22 female lions and 32 baby lions in a pride. How many lions are in the pride altogether?

GREEN

In its lifetime, a male lion killed 163 gazelle, 85 antelope and 39 zebras. How many animals did it kill altogether?

Now go to the **frog** question!





BLUE

There were 289 tadpoles in a pond but 110 of them were eaten before they could become frogs. How many tadpoles survived?


ORANGE

There are three frogs on a lily pad. One weighs 47 g, one weighs 63 g and one weighs 52 g. How much do the three frogs weigh altogether?

GREEN

There were 854 tadpoles in a pond but 191 of them were eaten before they could become frogs. How many tadpoles survived?

Now go to the **hamster** question!





BLUE

$$32 + 65 =$$

ORANGE

$$211 + 133 =$$

GREEN

$$465 + 189 =$$

Now go to the **snake** question!





BLUE

A zoo has 95 poisonous snakes and 49 non-poisonous snakes. How many more poisonous snakes are there than non-poisonous snakes?


ORANGE

A zoo has 431 poisonous snakes and 188 non-poisonous snakes. How many more poisonous snakes are there than non-poisonous snakes?

GREEN

A zoo has 587 poisonous snakes and 378 non-poisonous snakes. How many snakes are there altogether?

Now go to the **ladybird** question!





BLUE

A ladybird ate 89 aphids on Saturday. She then ate 26 on Sunday. How many more aphids did she eat on Saturday than Sunday?


ORANGE

A ladybird ate 129 aphids on Saturday and 139 aphids on Sunday. How many aphids did she eat over the whole weekend?

GREEN

A ladybird ate 892 aphids in a week. Her friend only ate 373 aphids. How many more aphids did the ladybird eat than her friend?

Now go to the **eagle** question!





BLUE

$$157 - 42 =$$


ORANGE


$$192 - 128 =$$

GREEN

$$844 - 635 =$$

Now go to the **crocodile** question!





BLUE

Alba the crocodile laid 43 eggs one year and 56 eggs the next year. How many eggs did she lay altogether over the two years?


ORANGE

Dora the crocodile is 423 cm long. Her baby is 228 cm long. How much longer is Dora than her baby?

GREEN

Gus is a saltwater crocodile who weighs 971 kg. Nigel is a Nile crocodile who weighs 559 kg. How much heavier is Gus than Nigel?

Now go to the **koala** question!





BLUE

Kerry the koala was on a tree branch 76 metres high. Kit the koala was higher up at 97 metres. How much further up the tree was Kit than Kerry?


ORANGE

A mummy koala ate 149 eucalyptus leaves one day and her baby ate 56 leaves. How many leaves did they eat altogether?

GREEN

A daddy koala ate 218 eucalyptus leaves one day. His son ate 86 leaves and his daughter ate 73. How many leaves did they eat altogether?

Now go to the **flamingo** question!





BLUE

$$83 + 59 =$$


ORANGE

$$46 + 32 + 59 =$$

GREEN

$$125 + 119 + 117 =$$

Now go to the **owl** question!





BLUE

A mummy owl had 190 feathers. Her baby owl had 61 feathers. How many feathers did they have altogether?

ORANGE

An owl caught 26 mice one night, 29 the next night and 16 the following night. How many mice did it catch altogether?

GREEN

A mummy owl weighs 287 grams. The daddy owl weighs 426 grams. The baby owl weighs 142 grams. How much does the owl family weigh altogether?

Now go to the **butterfly** question!





BLUE

A butterfly has 124 spots on one wing and 125 spots on the other wing. How many spots does it have altogether?


ORANGE


A red butterfly has 346 spots. A blue butterfly has 398 spots. How many more spots does the blue butterfly have than the red butterfly?

GREEN

A red butterfly has 597 spots. A blue butterfly has 249 spots. How many spots do they have altogether?

Now go to the **elephant** question!





BLUE

$$115 + 40 =$$


ORANGE

$$267 + 93 =$$

GREEN

$$835 - 554 =$$

Now go to the **bee** question!





BLUE

A bee visited 161 flowers in the morning and 33 flowers in the afternoon. How many flowers did the bee visit altogether?

ORANGE

A bee visited 154 flowers in the morning and 193 flowers in the afternoon. How many flowers did it visit altogether?

GREEN

A bee visited 856 flowers altogether in a day. If 466 of them were flowers on fruit trees, how many weren't fruit tree flowers?

Now go to the **bear** question!





BLUE

$$78 - 22 =$$

ORANGE

$$695 - 111 =$$

GREEN

$$925 - 94 =$$

Now go to the **dog** question!

