

Y6 SATs

RECOMMENDED! - mental maths TES resource
Interactive + Self-Marking [CLICK HERE](#)

Rounding

nearest 10, 100, 1000

BOOSTER

Help Code : 016



Complete this table to show the numbers to the nearest 100

2012A KS2 Q10

	rounded to the nearest hundred
316	300
3162	
31628	
316281	

2013A KS2 Q11



Write in the missing numbers.

Number	Rounded to the nearest whole number
5.05	
5.55	
4.45	
4.54	



Amy chooses two of these cards.

- 11 23 33 43

She adds the numbers on her two cards together.
She rounds the result to the nearest 10

Her answer is 60

Which two cards did Amy choose?

and

2010A KS2 Q2



2003A KS2 Q4

Which of these numbers give 80 when rounded to the nearest 10?

Circle all the correct numbers.



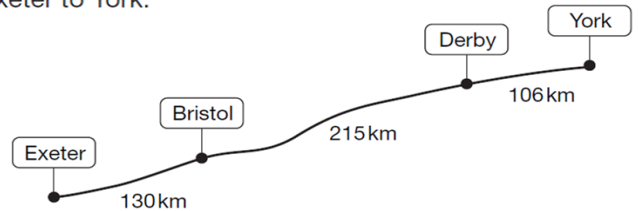
84 87 72 76 90



2006A KS2 Q8



The diagram shows distances on a train journey from Exeter to York.



How many kilometres is it altogether from Exeter to York?



km


What is the distance from Derby to York rounded to the nearest 10km?



km



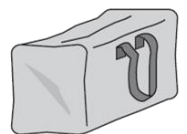
Here are three bags in a shop.



A
£11.50



B
£14.65



C
£16.50

How much does bag B cost to the nearest pound?



£

2007A KS2 Q6