

Fractions and Ordering

Order these fractions from the smallest.

$$\frac{3}{4} \quad \frac{1}{4} \quad \frac{2}{4}$$

Order these fractions from the biggest.

$$\frac{4}{6} \quad \frac{6}{6} \quad \frac{3}{6} \quad \frac{1}{6} \quad \frac{5}{6}$$

Colour the boxes according to its fraction. Which fraction is greater?

$$\frac{2}{5}$$



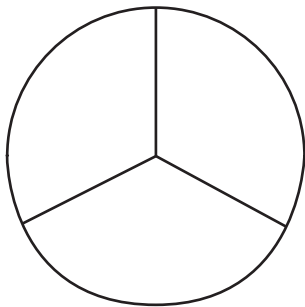
$$\frac{4}{5}$$



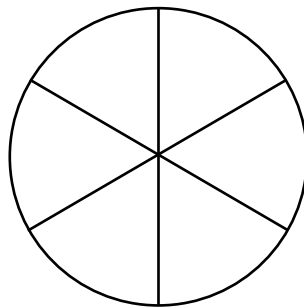
_____ is the greater fraction.

Colour in these 2 fractions below

$$\frac{2}{3}$$



$$\frac{5}{6}$$



_____ is the greater fraction.

Fractions and Ordering Answers

Order these fractions from the smallest.

$$\frac{3}{4} \quad \frac{1}{4} \quad \frac{2}{4}$$

$$\frac{1}{4} \quad \frac{2}{4} \quad \frac{3}{4}$$

Order these fractions from the biggest.

$$\frac{4}{6} \quad \frac{6}{6} \quad \frac{3}{6} \quad \frac{1}{6} \quad \frac{5}{6}$$

$$\frac{6}{6} \quad \frac{5}{6} \quad \frac{4}{6} \quad \frac{3}{6} \quad \frac{1}{6}$$


Colour the boxes according to its fraction. Which fraction is greater?

$$\frac{2}{5}$$



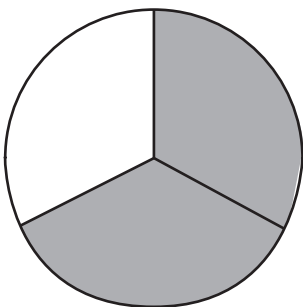
$\frac{4}{5}$ is the greater fraction.

$$\frac{4}{5}$$

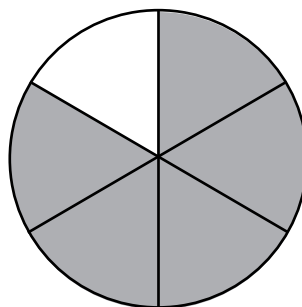


Colour in these 2 fractions below

$$\frac{2}{3}$$



$$\frac{5}{6}$$



$\frac{5}{6}$ is the greater fraction.

Fractions and Ordering

Order these fractions from the smallest.

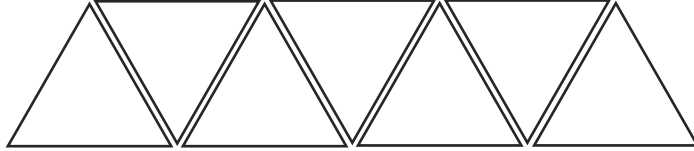
$$\frac{3}{6} \quad \frac{1}{6} \quad \frac{5}{6} \quad \frac{2}{6} \quad \frac{4}{6}$$

Order these fractions from the biggest.

$$\frac{4}{12} \quad \frac{6}{12} \quad \frac{8}{12} \quad \frac{10}{12} \quad \frac{11}{12}$$

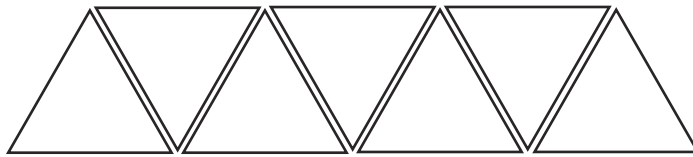
Colour the boxes according to its fraction. Which fraction is greater?

$$\frac{3}{7}$$

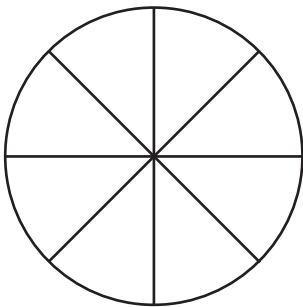


_____ is the greater fraction.

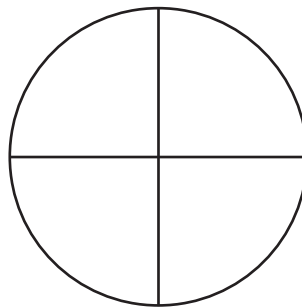
$$\frac{6}{7}$$



$$\frac{5}{8}$$



$$\frac{3}{4}$$



_____ is the greater fraction.

Fractions and Ordering

Order these fractions from the smallest.


$$\frac{7}{9} \quad \frac{3}{9} \quad \frac{9}{9} \quad \frac{1}{9} \quad \frac{4}{9}$$

Order these fractions from the biggest.


$$\frac{4}{4} \quad \frac{1}{2} \quad \frac{2}{3} \quad \frac{2}{4}$$

Colour the boxes according to its fraction. Which fraction is smallest?

$$\frac{6}{6}$$

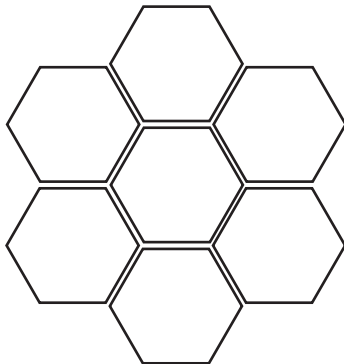


$$\frac{4}{6}$$

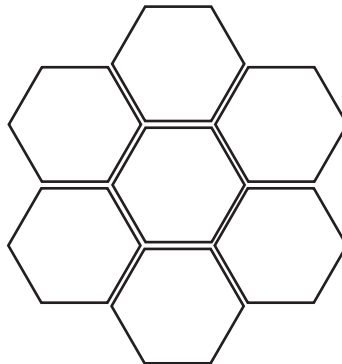


_____ is the smallest fraction.

$$\frac{2}{7}$$



$$\frac{5}{7}$$



_____ is the smallest fraction.

Fractions and Ordering Answers

Order these fractions from the smallest.

$$\frac{3}{6} \quad \frac{1}{6} \quad \frac{5}{6} \quad \frac{2}{6} \quad \frac{4}{6}$$

$$\frac{1}{6} \quad \frac{2}{6} \quad \frac{3}{6} \quad \frac{4}{6} \quad \frac{5}{6}$$

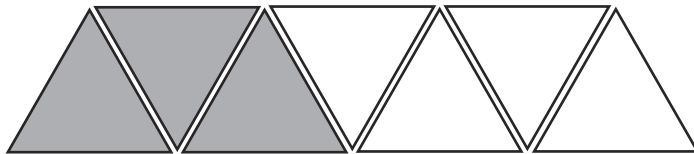
Order these fractions from the biggest.

$$\frac{4}{12} \quad \frac{6}{12} \quad \frac{8}{12} \quad \frac{10}{12} \quad \frac{11}{12}$$

$$\frac{11}{12} \quad \frac{10}{12} \quad \frac{8}{12} \quad \frac{6}{12} \quad \frac{4}{12}$$

Colour the boxes according to its fraction. Which fraction is greater?

$$\frac{3}{7}$$

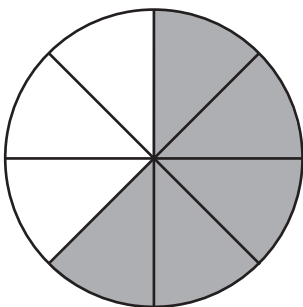


$\frac{6}{7}$ is the greater fraction.

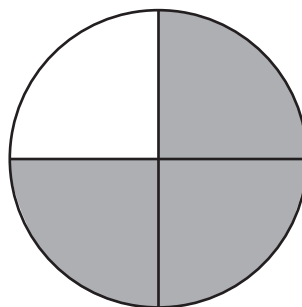
$$\frac{6}{7}$$



$$\frac{5}{8}$$



$$\frac{3}{4}$$



$\frac{3}{4}$ is the greater fraction.

Fractions and Ordering Answers

Order these fractions from the smallest.

$$\frac{7}{9} \quad \frac{3}{9} \quad \frac{9}{9} \quad \frac{1}{9} \quad \frac{4}{9}$$

$$\frac{1}{9} \quad \frac{3}{9} \quad \frac{4}{9} \quad \frac{7}{9} \quad \frac{9}{9}$$

Order these fractions from the biggest.

$$\frac{4}{4} \quad \frac{1}{2} \quad \frac{2}{3} \quad \frac{2}{4}$$

$$\frac{4}{4} \quad \frac{2}{3} \quad \frac{2}{4} \quad \frac{1}{2}$$

Colour the boxes according to its fraction. Which fraction is smallest?

$$\frac{6}{6}$$

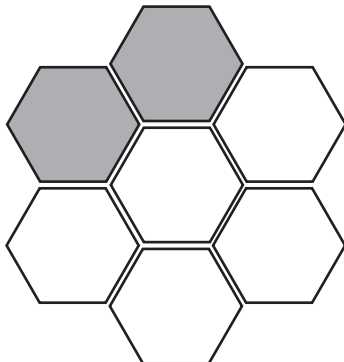


$\frac{4}{6}$ is the smallest fraction.

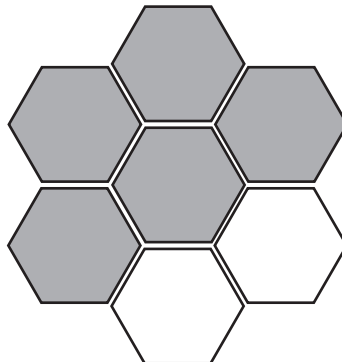
$$\frac{4}{6}$$



$$\frac{2}{7}$$



$$\frac{5}{7}$$



$\frac{2}{7}$ is the smallest fraction.

Fractions and Ordering

Order these fractions from the smallest.

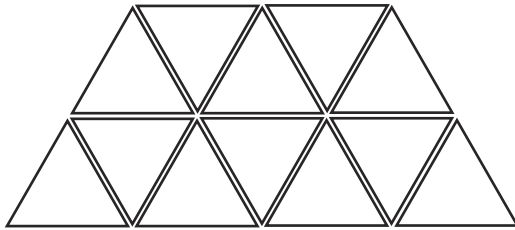
$$\frac{9}{18} \quad \frac{1}{9} \quad \frac{5}{9} \quad \frac{1}{3} \quad \frac{8}{9}$$

Order these fractions from the biggest.

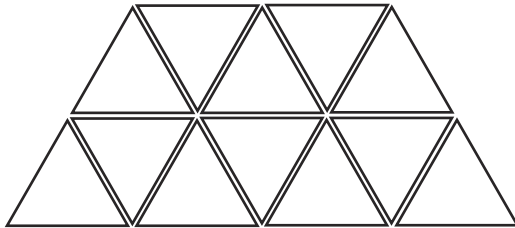
$$\frac{4}{15} \quad \frac{9}{15} \quad \frac{1}{5} \quad \frac{4}{5} \quad \frac{11}{15}$$

Colour the boxes according to its fraction. Which fraction is greater?

$$\frac{7}{12}$$

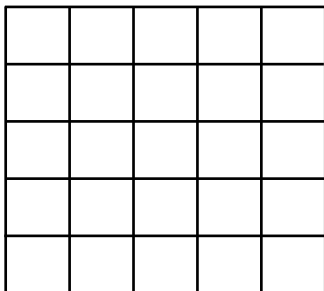


$$\frac{3}{4}$$

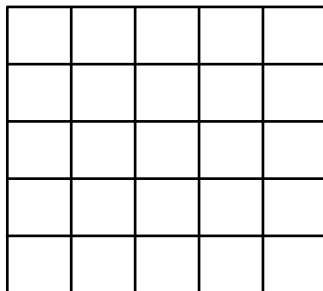


_____ is the greater fraction.

$$\frac{17}{25}$$



$$\frac{4}{5}$$



_____ is the greater fraction.

Fractions and Ordering Answers

Order these fractions from the smallest.

$$\frac{9}{18} \quad \frac{1}{9} \quad \frac{5}{9} \quad \frac{1}{3} \quad \frac{8}{9}$$

$$\frac{1}{9} \quad \frac{1}{3} \quad \frac{9}{18} \quad \frac{5}{9} \quad \frac{8}{9}$$

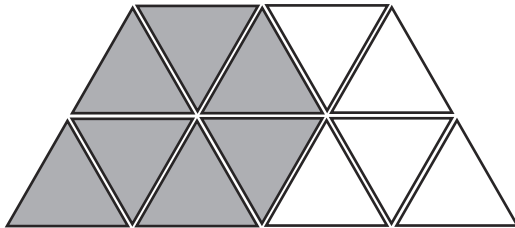
Order these fractions from the biggest.

$$\frac{4}{15} \quad \frac{9}{15} \quad \frac{1}{5} \quad \frac{4}{5} \quad \frac{11}{15}$$

$$\frac{4}{5} \quad \frac{11}{15} \quad \frac{9}{15} \quad \frac{4}{15} \quad \frac{1}{5}$$

Colour the boxes according to its fraction. Which fraction is greater?

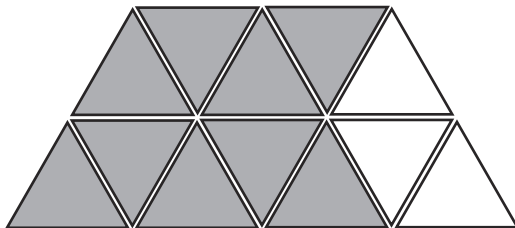
$$\frac{7}{12}$$




$$\frac{3}{4}$$

is the greater fraction.

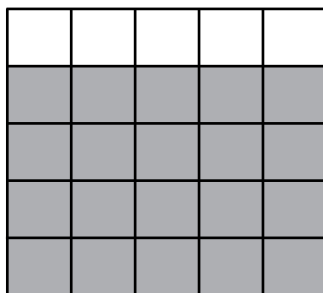
$$\frac{3}{4}$$



$$\frac{17}{25}$$



$$\frac{4}{5}$$



is the greater fraction.